


Cornerstone Christian Academy
Introduces:




Timothy
and His
Summer Time Ticker

Answers

For students after
Second Grade

Please Return to CCA

Lesson 1 Date _____ Parent's Initials


Bible 


In the beginning God created the heavens and the earth.

Genesis 1:1

Genesis means beginning.

Draw animals walking to the ark.



Math 

1. Astronaut Neil Armstrong walked on the moon in 1969. How many years ago was that?
Why? Current year - 1969 =

2.


$$\begin{array}{r} 16,925 \\ + 29,388 \\ \hline 46,313 \end{array}$$

3. Add 8

	9	3	6	4
	<u>17</u>	<u>11</u>	<u>14</u>	<u>12</u>

Cornerstone Christian Academy
Second Grade
Summer Time Ticker


Lesson 1

Phonics/Language 


1. Answer in a complete sentence. What is your favorite creation?

2. Put this list of created things in A B C order.

octopus	<u>constellations</u>
flowers	<u>flowers</u>
planets	<u>octopus</u>
oxygen	<u>orbits</u>
constellations	<u>oxygen</u>
orbits	<u>peanuts</u>
peanuts	<u>planets</u>

History & Science 

Write the planets in order from the sun. Circle the red planet. Box the only planet with water.

1st	<u>Mercury</u>	
2nd	<u>Venus</u>	
3rd	<u>Earth</u>	
4th	<u>Mars</u>	
5th	<u>Jupiter</u>	
6th	<u>Saturn</u>	
7th	<u>Uranus</u>	
8th	<u>Neptune</u>	
9th	<u>Pluto</u>	

Lesson 2

Date _____ Parent's Initials

Bible

"By the seventh day God had finished the work he had been doing; so on the seventh day he rested from all his work." Genesis 2:2

Math

- Nick went to bed at 8:00 and got up at 7:30. How many hours did he sleep? 1 1/2
Is 8:00 a.m. or p.m.? p.m.
Is 7:30 a.m. or p.m.? a.m.
- | |
|-------|
| 1,302 |
| - 291 |
| 1,011 |
- $XLVII = 47$
- | |
|---------|
| 5,206 |
| - 1,783 |
| 3,423 |

Cornerstone Christian Academy
Second Grade
Summer/TIME/Ticker

Lesson 2

Phonics/Language

Circle mistakes and correct them.

- Are you go^Ang to bed on time? (3)
- He helps you^H body grow. (3)
- Do you al^Aways go to bed when your parents tell you? (4)
- You need^A to rest, just like^H God did. (3)

History & Science

What number is this president?

Andrew Jackson	<u>7</u>
Jimmy Carter	<u>39</u>
Theodore Roosevelt	<u>26</u>
Martin Van Buren	<u>8</u>
John Quincy Adams	<u>6</u>
James A. Garfield	<u>20</u>

Lesson 3

Date _____ Parent's Initials

Bible

"God made two great lights; the greater light to govern the day and the lesser light to govern the night." Genesis 1:16

On what day did God create these two lights? Day 4.

Draw and color the two lights. sun moon

Math

- Write 1/2 of

8	<u>4</u>	100	<u>50</u>
24	<u>12</u>	1,000	<u>500</u>
60	<u>30</u>	30	<u>15</u>
- Multiply by 2.

10	<u>20</u>	8	<u>16</u>
12	<u>24</u>	0	<u>0</u>
- Write before and after numbers by twos.

94	96	<u>98</u>	<u>100</u>	102	104	<u>106</u>	<u>108</u>	110
----	----	-----------	------------	-----	-----	------------	------------	-----

Cornerstone Christian Academy
Second Grade
Summer/TIME/Ticker

Lesson 3

Phonics/Language

Use to, too, or two.

- We will go to the beach.
- It's fun to swim and build sand castles, too.
- If you get too much sun, you will look like a lobster!
- Two girls will find two shells.
- I hope the boys do, too!
- They had two, too many to carry!

History & Science

- God made the sun to be the greater light.
- God made the moon to be the lesser light.
- If you are in the greater light too long at the swimming pool, you could get sunburned! Ouch! Finish this picture and color.

Lesson 4

Date _____ Parent's Initials

Bible

Jesus answered, "I tell you the truth, no one can enter the kingdom of God unless he is born of water and the Spirit." John 3:5

The Holy Spirit is the invisible part of God that lives in us when we have received Jesus as our Savior. Does the Spirit live in you?

Math

- Write the value of 4

2,846	<u>40</u>	6,334	<u>4</u>
14,920	<u>4,000</u>	53,401	<u>400</u>
- Solve:

$6 \times 4 =$	<u>24</u>	$4 \times 7 =$	<u>28</u>
$4 \times 3 =$	<u>12</u>	$9 \times 4 =$	<u>36</u>
- Write the quotient:

$44 \div 4 =$	<u>11</u>	$16 \div 4 =$	<u>4</u>	$5 \div 20 =$	<u>1/4</u>	$12 \div 48 =$	<u>1/4</u>
---------------	-----------	---------------	----------	---------------	------------	----------------	------------

Cornerstone Christian Academy
Second Grade
Summer/TIME/Ticker

Lesson 4

Phonics/Language

- Solve the riddle:

You can't see me,
You can't hold on to me,
You can pass through me;
I take up spaces even though
I have no shape of my own.

What am I? air
- Circle special sounds in riddle.
 - Circle a words in green.
 - Circle o words in yellow.
 - Circle contractions in blue.
 - Circle compounds in red.

History & Science

Which force makes.....

- balloons pop? Air
- kites fly? Wind
- apples fall? Gravity
- rafts float? Water

Lesson 5

Date _____ Parent's Initials

Bible

"Be joyful in hope, patient in affliction, faithful in prayer." Romans 12:12

I lost all my children in one day.
I lost my servants and animals.
I even lost my health.
Who am I? Job

How can you show patience today? _____

Math

1. Job lost seven sons and three daughters.
How many children did he lose? 10
Why? 7 + 3 = 10

$$\begin{array}{r} 3. \quad 5,206 \\ - 1,783 \\ \hline 3,423 \end{array}$$

2. Job owned 7,000 sheep, 3,000 camels, 500 yoke of oxen, and 500 donkeys.

The Lord returned two times the animals

Job lost. Write how many Job had now.

14,000 sheep, 6,000 camels,

1,000 yoke of oxen,

1,000 donkeys

$$\begin{array}{r} 4. \quad 57,256 \\ + 21,875 \\ \hline 79,131 \end{array}$$

$$\begin{array}{r} 5. \quad 3,000 \\ - 1,629 \\ \hline 1,371 \end{array}$$

Lesson 6

Date _____ Parent's Initials

Bible

"But the fruit of the Spirit is love, joy, peace, patience, kindness, goodness, faithfulness, gentleness, and self-control." Galatians 5:22, 23a

Which of these will you ask God to grow in you today? _____

Math

1. Circle the factors. Write the multiplication twin.

3 × 3 = 15 4 × 7 = 28 3 × 3 = 45
3 × 5 = 15 7 × 4 = 28 5 × 9 = 45

2. Write the addition sentence as a multiplication sentence.

4 + 4 + 4 + 4 + 4 = 20 5 × 4 = 20

7 + 7 = 14 2 × 7 = 14

5 + 5 + 5 = 15 3 × 5 = 15

Lesson 7

Date _____ Parent's Initials


Bible

"Do not let this Book of the Law depart from your mouth; meditate on it day and night, so that you may be careful to do everything written in it. Then you will be prosperous and successful. Have I not commanded you? Be strong and courageous; do not be terrified; do not be discouraged, for the Lord your God will be with you wherever you go." Joshua 1: 8-9 (He will even be with you when you go on vacation to _____)

Math

- 1 kg = 1,000 g
- 1 yr. = 12 mo.
- 1 gal. = 4 qt.
- 1 m = 100 cm
- 1 yd. = 36 in.
- 1 hr. = 60 min.
- 1 day = 24 hr.
- 1 ft. = 12 in.
- 1 pt. = 2 c.
- 1 lb. = 16 oz.

Color as you remember.



Cornerstone Christian Academy
Second Grade
SummerTimeTicker

Lesson 5

Phonics/Language

Divide and mark the accent.

1. servants
2. suffering
3. comfort
4. messenger
5. himself
6. sacrifice
7. belongings

History & Science

Name the animals home.

1. beaver's lodge
2. bird's nest
3. earthworm's burrow
4. bear's den
5. chipmunk's tunnel

Draw and color me in my home.



Cornerstone Christian Academy
Second Grade
SummerTimeTicker

Lesson 6

Phonics/Language

Circle the special sounds.

1. Chlorophyll captures the leaves green.
2. The veins carry water to each part of the leaf.
3. Without leaves, plants would strive to die.
4. Leaves make sugar for the plant and make oxygen for us to breathe.
5. It takes the work of many leaves to make a round, juicy apple.

History & Science

Match and color.

- flowers — take water and minerals from the soil
- stem — make seeds
- leaves — make food for the plant
- roots — moves water and minerals from the roots to the leaves



Cornerstone Christian Academy
Second Grade
SummerTimeTicker

Lesson 7

Phonics/Language

Add suffixes to make a new word.

1. swim + ing swimming
2. pack + ed packed
3. drive + ing driving
4. bike + ing biking
5. tour + ed toured
6. study + ed studied
7. fish + ing fishing

History & Science

Name the state.

1. The smallest state - RI
2. The largest state - AK
3. Our neighbor to the north - WI
4. The 50th state - HI
5. A state on the Atlantic coast - _____
6. A state on the Pacific coast - _____
7. The state where the Pilgrims settled - MA

Lesson 8


Date _____ Parent's Initials

Bible

Look at Joshua 1: 8-9. What three things should we do with God's Word (the Book of the Law)?

1. Talk about it.
2. Think about (study) it.
3. Do it.

Color this Bible the same color as yours.



Math

1. Write the number of bills and coins needed. Use the fewest pieces of money.

Amount	\$5.00	\$1.00	25¢	10¢	5¢	1¢
\$9.73	1	4	2	2	0	3
\$4.68	0	4	2	1	1	3

2. Give the estimated sum.

$$\begin{array}{r} 43 + 17 \\ \hline 60 \end{array} \quad \begin{array}{r} 18 + 52 \\ \hline 70 \end{array} \quad \begin{array}{r} 14 + 19 \\ \hline 30 \end{array}$$

Cornerstone Christian Academy
Second Grade
Summer/Time/Ticker

Lesson 8

Phonics/Language

Write the cue words.

1. oo in book
2. oo in tooth
3. oo in flood
4. ea in leaf
5. ea in thread
6. ea in steak
7. ow in owl
8. ow in bowl

History & Science

1. A colony is a land that is ruled by another country.
2. The United States was first made up of thirteen colonies ruled by England.
3. A person who lived in the American colonies was called a colonist.
4. These times in America were called the colonial days.

Lesson 9

Date _____ Parent's Initials

Bible

But Moses said to God, "Who am I that I should go to Pharaoh and bring the Israelites out of Egypt?" Exodus 3:11

Look up Numbers 12:3. It tells us that Moses was more humble than anyone else on earth.

What does humble mean? not proud; meek; depending on God, not self

The opposite of humble is proud.

Math

1. Solve:

$$\begin{array}{r} 9 \times 5 = \\ \hline 45 \end{array} \quad \begin{array}{r} 6 \times 5 = \\ \hline 30 \end{array} \quad \begin{array}{r} 5 \times 5 = \\ \hline 25 \end{array} \quad \begin{array}{r} 8 \times 5 = \\ \hline 40 \end{array}$$

2. Solve:

$$\begin{array}{r} 24 + 4 = \\ \hline 6 \end{array} \quad \begin{array}{r} 24 + 3 = \\ \hline 8 \end{array} \quad \begin{array}{r} 24 + 2 = \\ \hline 12 \end{array} \quad \begin{array}{r} 24 + 1 = \\ \hline 24 \end{array}$$

3. The answer to a division problem is called the quotient.

4. The answer to a multiplication problem is called the product.

Cornerstone Christian Academy
Second Grade
Summer/Time/Ticker

Lesson 9

Phonics/Language

Possessives show that something belongs to someone. Add 's and a thing that could belong.

Answers vary

1. Pharaoh 's hard heart
2. God 's love
3. clown 's nose
4. teacher 's chalk
5. Pippi 's gold
6. Wilbur 's friend
7. bird 's nest
8. train 's whistle

History & Science

Can you list the original 13 colonies? Use a book for help.

1. Delaware DE
2. Pennsylvania PA
3. New Jersey NJ
4. New York NY
5. Virginia VA
6. Georgia GA
7. Connecticut CT
8. Massachusetts MA
9. Rhode Island RI
10. Maryland MD
11. South Carolina SC
12. New Hampshire NH
- 13.

Lesson 10

Date _____ Parent's Initials

Bible

List the plagues in order. Use your Bible for help.

- 1st plague (Ex. 7:17) water to blood
- 2nd plague (Ex. 8:3) frogs
- 3rd plague (Ex. 8:16) gnats
- 4th plague (Ex. 8:21) flies
- 5th plague (Ex. 9:3) plague on animals
- 6th plague (Ex. 9:9) boils
- 7th plague (Ex. 9:19) hailstorm
- 8th plague (Ex. 10:1) locusts
- 9th plague (Ex. 10:21) darkness
- 10th plague (Ex. 11:5) death of firstborn

Pharaoh had a H A R D H E A R T.

Pray that God will make you willing to listen and obey

Math

1. Write the missing terms or signs.

$$6 + 8 = 14 \quad 9 - 5 = 4$$

$$8 + 8 = 16 \quad 5 \times 1 = 5$$

$$7 \times 3 = 21 \quad 14 \div 2 = 7$$

$$15 - 6 = 9 \quad 5 + 6 = 11$$

$$2 \times 6 = 12 \quad 12 \div 6 = 2$$

$$\begin{array}{r} \$ 3.14 \\ - 1.69 \\ \hline \$ 1.45 \end{array}$$

$$\begin{array}{r} \$ 8.00 \\ - 2.47 \\ \hline \$ 5.53 \end{array}$$

$$\begin{array}{r} \$.53 \\ - .22 \\ \hline \$.31 \end{array}$$

Cornerstone Christian Academy
Second Grade
Summer/Time/Ticker

Lesson 10

Phonics/Language

Write the opposite.

1. first last
2. worst best
3. right left, wrong
4. early late
5. learn teach
6. colder hotter
7. darker lighter
8. louder softer

History & Science

Name the shop we have today that would be most like these colonial shops.

1. Cobbler shop Shoe store
2. Apothecary shop Drug store
3. Silversmith shop Jewelry store
4. Joiner shop Furniture store
5. Blacksmith shop Hardware store

Add more shops



Bible

What is God's Word like?
 Psalm 19:10 Sweeter than honey, pure gold
 James 1:23 mirror
 Hebrews 4:12 double-edged sword
 Psalm 119:105 lamp / light

Are you reading God's Word this summer? _____

Math

1. Circle Roman numerals greater than 10. 2. $\frac{90}{-18}$
 VIII (L) IX (XI) (XC) (XV) IV 72

3. $\frac{4,212}{-1,167}$ 4. $\frac{732}{569}$ 5. $\frac{4,082}{+3,458}$
3,045 1,436 7,540

Phonics/Language

Circle the special sounds. Write whether you hear \bar{e} or \bar{a} .

m <u>o</u> n <u>e</u> y	\bar{e}	o <u>a</u> t	\bar{a}
u <u>m</u> m <u>e</u> r	\bar{e}	s <u>u</u> n	\bar{a}
l <u>o</u> o <u>u</u> s	\bar{e}	m <u>e</u> d	\bar{e}
u <u>o</u> l <u>o</u> u	\bar{a}	v <u>a</u> ll	\bar{e}
v <u>o</u> l	\bar{e}	u <u>o</u> l	\bar{a}
g <u>o</u> l <u>o</u> d	\bar{e}	m <u>o</u> u	\bar{e}
l <u>o</u> u <u>g</u>	\bar{e}	s <u>u</u> n	\bar{a}
u <u>o</u> l	\bar{a}	u <u>o</u> l	\bar{e}

History & Science

Write *attract* or *repel* below the bar magnets.

S N | N S N S | N S
repel attract

S N | S N N S | S N
attract repel

What must an object contain in order for a magnet to attract?
Iron

Bible 12

12 tribes of Israel Genesis 49:28
12 stones from the Jordan Joshua 4:3
12 disciples of Jesus Matthew 10:1
12 basketsful of leftovers Luke 9:17

Math

1. Find the perimeter. 3 in.

 This is a rectangle

2. Write the value of the circled digits.
 $3\textcircled{2}7$ 20
 $4\textcircled{5}8$ 50
 $2\textcircled{7}3$ 200
 $1\textcircled{8}5$ 100
 $3\textcircled{2}74$ 3,000

Phonics/Language

Add -ed and -ing to these root words.

flip	tune
<u>flipped</u>	<u>tuned</u>
<u>flipping</u>	<u>tuning</u>
play	trot
<u>played</u>	<u>trotted</u>
<u>playing</u>	<u>trotting</u>



History & Science

Name the insect's 3 body parts.
 1. head
 2. thorax
 3. abdomen

An insect has 6 legs. (1/2 dozen)
 A spider has 8 legs.
 Is a spider an insect? Yes or No
 On a separate sheet of paper, write 3 sentences about an interesting insect you have seen. Draw a picture of it. Staple your work to your ticker.

Bible

Complete the Bible couples.
 Abraham + Sarah
 Isaac + Rebekah
 Ruth + Boaz
 Eve + Adam

"Dear friends, let us love one
another, for love comes from God.
Everyone who loves has been
born of God and
knows God." 1 John 4:7

Math

1. Mr. and Mrs. Swedberg were married in June, 1977. How many years have they been married?
 Why? Current Year - 1977 =

2. What fraction of this row is circles? $\frac{3}{4}$
 What fraction of this row is squares? $\frac{1}{4}$

3. Show $\frac{2}{3}$ green.

4. Show $\frac{1}{2}$ blue.

5. Show $\frac{3}{8}$ red.

Phonics/Language

Rewrite these phrases as complete sentences.

1. a week of vacation Vary
We took a week of vacation in Florida.

2. at Hopkin's Park
Have you played at Hopkin's Park?

3. found my scooter
I hope he found my scooter!

4. after going to the library
I read all day after going to the library.

5. a wedding reception
We went to a wedding reception outdoors.

History & Science

Name the babies.

A baby kangaroo	<u>joey</u>
A baby deer	<u>fawn</u>
A baby cow	<u>calf</u>
A baby eagle	<u>eaglet</u>
A baby pig	<u>piglet</u>
A baby owl	<u>owlet</u>
A baby beaver	<u>kit</u>
A baby goat	<u>kid</u>

Lesson 14 Date _____ Parent's Initials

Bible

Blessed is the nation whose God is the Lord, the people he chose for his inheritance. Psalm 33:12

Draw the front of our quarter in this circle.
Write all the special words you see.

Math

Draw coins to show 56¢ in 5 more different ways. Make sure you write the way that uses the fewest coins and circle it.

<p>Example:</p>	<p><u>50¢</u>, <u>5¢</u>, <u>1¢</u></p>

either is acceptable for fewest coins

Cornerstone Christian Academy
Second Grade
Summer/Time Ticker

Lesson 14

Phonics/Language

Circle the special sounds. Then write in alphabetical order.

holiday

flag

honor

soldiers

nation

legislation

republic

liberty

justice

Color my stars and stripes.

History & Science

June 14 is a holiday. What is it? Flag Day

Our flag has 50 stars.
Our flag has 13 stripes.
Our flag has 7 red stripes.
Our flag has 6 white stripes.
Red stands for courage.
White stands for purity.
Blue stands for truth.
Our national anthem is, The Star-Spangled Banner.

Lesson 15 Date _____ Parent's Initials

Bible

Children obey your parents in the Lord for this is right. Honor your father and mother - which is the first commandment with a promise - that it may go well with you and that you may enjoy long life on the earth. Ephesians 6:1-3

Pray for your father or grandfather while he is at work today. Ask God to help you be obedient.

Math

Put these measurement abbreviations under the correct heading.

<p>min., cm, ft., lb., kg, hr., qt., oz., yd., mo., g, in., c, m, gal., yr., pt., da.</p>	<table style="width: 100%; border-collapse: collapse;"> <tr> <td style="text-align: center;"><u>length</u></td> <td style="text-align: center;"><u>weight</u></td> </tr> <tr> <td>cm in.</td> <td>lb. g</td> </tr> <tr> <td>ft. m</td> <td>kg</td> </tr> <tr> <td>yd.</td> <td>oz.</td> </tr> <tr> <td style="text-align: center;"><u>liquid</u></td> <td style="text-align: center;"><u>time</u></td> </tr> <tr> <td>qt.</td> <td>min. da.</td> </tr> <tr> <td>c.</td> <td>hr.</td> </tr> <tr> <td>gal.</td> <td>mo.</td> </tr> <tr> <td>pt.</td> <td>yr.</td> </tr> </table>	<u>length</u>	<u>weight</u>	cm in.	lb. g	ft. m	kg	yd.	oz.	<u>liquid</u>	<u>time</u>	qt.	min. da.	c.	hr.	gal.	mo.	pt.	yr.
<u>length</u>	<u>weight</u>																		
cm in.	lb. g																		
ft. m	kg																		
yd.	oz.																		
<u>liquid</u>	<u>time</u>																		
qt.	min. da.																		
c.	hr.																		
gal.	mo.																		
pt.	yr.																		

Cornerstone Christian Academy
Second Grade
Summer/Time Ticker

Lesson 15

Phonics/Language

Write a note to your father or grandfather. In 5 sentences tell:

- what you love about him,
- about a special time you remember with him
- what you will be willing to do for him to help
- how you will pray for him.

Decorate your note and give it for Father's Day.

Father's Day is on June (check calendar)
date

History & Science

Which state am I? Write the abbreviation.

OK I am north of Texas.
AZ I am the Grand Canyon state.
KY I am the Mammoth Cave state.
MD I am nearly cut in half by the Chesapeake Bay.
HI I am made entirely of islands.
NY Another part of me is Long Island.
ME I am the state farthest NE.
ID I am famous for growing potatoes.
IL My capital is Springfield.

Lesson 16 Date _____ Parent's Initials

Bible

Jesus said, "Let the little children come to me, and do not hinder them, for the kingdom of heaven belongs to such as these." Matthew 19:14

Check a dictionary. Hinder means to stop; prevent; block

Math

1. Write one hundred more.

824	1,369	561	2,030
<u>924</u>	<u>1,469</u>	<u>661</u>	<u>2,130</u>

2. Write the cents using a dollar sign and decimal point.

47¢	79¢	6¢	3¢
<u>\$.47</u>	<u>\$.79</u>	<u>\$.06</u>	<u>\$.03</u>

How many in a dozen? 12 How many in a 1/2 dozen? 6
How many in a 1/3 dozen? 4 How many in a 1/4 dozen? 3

Cornerstone Christian Academy
Second Grade
Summer/Time Ticker

Lesson 16

Phonics/Language

Circle the special sounds. Put the punctuation mark in place.

- I hope you are enjoying a safe summer and.
- Do you follow safety rules while riding your bike ?
- How important it is that everyone obeys laws and rules for protection!
- Did you know that you can signal a left and right turn while riding your bike ?
- With your left arm straight but you see you're going left and with your arm bent at the elbow you see you're going right.

History & Science


Do you remember how to tell a moth from a butterfly?

<u>Butterfly</u>	<u>Moth</u>
1. Fly during the <u>day</u>	1. Prefer to fly at <u>night</u>
2. Rest with wings <u>together</u>	2. Rest with wings <u>flat</u>
3. Antennae are <u>thin</u>	3. Antennae are <u>like a</u>
<u>with club</u>	<u>feather</u>
4. Bodies are <u>thin</u>	4. Bodies are <u>fat</u>
	and <u>furry</u>


A moth comes out of a cocoon.
A butterfly comes out of a chrysalis.

Lesson 20

Date _____ Parent's Initials

Bible 

Look at the birds of the air; they do not sow or reap or store away in barns, and yet your heavenly Father feeds them. Are you not much more valuable than they? Matthew 6:26
 What lesson can you learn from the birds? That God takes care of us.

Math 

1. Count by 4's using Roman numerals from 4 to 48.

4. $8,700 + 3,250 = 11,950$

5. $9,687 + 432 = 10,119$

6. $6,429 - 3,964 = 2,465$


2. Write a number that is 10 more.

98 304 1,791 6,841
108 314 1,801 6,851


3. Circle the odd numbers.

776 350 1,862 99,999 2,465

Lesson 20

Phonics/Language 

Have you been bird watching this summer? Write 6 sentences about a bird you have seen. What did it look like, what was it doing, how did it sound, where was its home, and can you identify it? You may need to go outside and observe to do this.

History & Science 

God gives protection to His creatures. What protection did He give.....

the skunk? scent

the porcupine? quills

the cat? claws


the bird? flying, color

the turtle? shell

the bear? size


the fawn? spotted color

you? skin



Lesson 21


Date _____ Parent's Initials

Bible 

Look up Psalm 24:3.
 Question:
 Who may ascend the hill of the Lord?
 Who may stand in his holy place?

Look up Psalm 24:4
 Answer:
 He who has clean hands and a pure heart, who does not lift up his soul to an idol or swear by what is false.

You can make yourself clean on the outside, but God will clean you on the inside. Ask Him to cleanse you of your sins today.

Math 


1. $7 - 5 + 10 - 6 + 8 = 14$

2. $10 - 8 \times 7 - 9 \times 2 = 10$

3. $12 + 12 + 3 + 8 + 1 = 17$

4. $18 - 6 + 3 + 5 + 7 - 5 = 5$

5. Divide the rectangle in half from vertex to vertex.




$6 + 9 = 15$

$9 + 6 = 15$


$15 - 6 = 9$

$15 - 9 = 6$



Cornerstone Christian Academy
 Second Grade
 Summer/Time/Ticker

Lesson 21

Phonics/Language 

Write can or may.


1. I can empty my trash container every day.

2. After work, mother says I may play.

3. May I help you clean the car?

4. If you can keep your room clean all week, you may go to Magic Waters on Saturday.

5. I think I can, I think I can.

History & Science 


Answers vary.

I can keep my body clean by _____

I can keep my hair clean by _____


I can keep my teeth clean by _____

I can keep God's earth clean by _____



Lesson 22


Date _____ Parent's Initials

Bible 

If any of you lacks wisdom, he should ask God, who gives generously to all without finding fault, and it will be given to him, James 1:5

How can even our President find wisdom? He can ask God.

Pray for him today.

Math 

1. Write the products.


x	10	7	9	6	11
2	20	14	18	12	22
5	50	35	45	30	55
4	40	28	36	24	44
3	30	21	27	18	33
1	10	7	9	6	11

2. 1 qt. = 2 pt.

3. 1 pt. = 2 c.


4. 1 gal. = 16 c.

5. 1 gal. = 4 qt.



Cornerstone Christian Academy
 Second Grade
 Summer/Time/Ticker

Lesson 22

Phonics/Language 

Write the contractions.


do not don't can not can't

she will she'll he is he's

I have I've will not won't

they have they've does not doesn't

it is it's could not couldn't

History & Science 

Which president?

39 Jimmy Carter

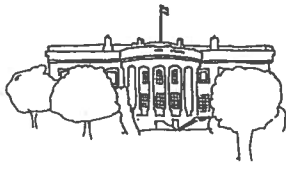
20 James A. Garfield

4 James Madison

11 James K. Polk

5 James Monroe

15 James Buchanan



Lesson 23

Date _____

Parent's Initials


Bible

One special celebration for the Israelites was the Passover. Look up these verses to see when the Passover was celebrated in each case.

Exodus 12:11 leaving Egypt

Luke 2:41-42 Jesus was 12

Matthew 26:17-18 the Last Supper



Math

1.	$\begin{array}{r} 4,000 \\ - 362 \\ \hline 3,638 \end{array}$	2.	$\begin{array}{r} 900 \\ - 798 \\ \hline 102 \end{array}$	3.	$\begin{array}{r} 6,301 \\ - 984 \\ \hline 5,317 \end{array}$
----	---	----	---	----	---

4. List from least to greatest.
cm, ft., in., m, 1/2 in., yd.

1.	<u>cm</u>	5.	$\begin{array}{r} 8 \\ \times 4 \\ \hline 32 \end{array}$	6.	$\begin{array}{r} 12 \\ \times 4 \\ \hline 48 \end{array}$	7.	$\begin{array}{r} 7 \\ \times 7 \\ \hline 49 \end{array}$	4.	$\begin{array}{r} 3 \\ \times 3 \\ \hline 9 \end{array}$
2.	<u>1/2 in.</u>	8.	$\begin{array}{r} 7 \\ \times 3 \\ \hline 21 \end{array}$	9.	$\begin{array}{r} 5 \\ \times 7 \\ \hline 35 \end{array}$	10.	$\begin{array}{r} 6 \\ \times 3 \\ \hline 18 \end{array}$		
3.	<u>in.</u>								
4.	<u>ft.</u>								
5.	<u>yd.</u>								
6.	<u>m</u>								

Cornerstone Christian Academy
Second Grade
SummerTimeTidder

Lesson 23



Phonics/Language

Write the abbreviations for the months of the year.

- | | |
|----------------|-----------------|
| 1. <u>Jan.</u> | 7. <u>July</u> |
| 2. <u>Feb.</u> | 8. <u>Aug.</u> |
| 3. <u>Mar.</u> | 9. <u>Sept.</u> |
| 4. <u>Apr.</u> | 10. <u>Oct.</u> |
| 5. <u>May</u> | 11. <u>Nov.</u> |
| 6. <u>June</u> | 12. <u>Dec.</u> |

History & Science

Name the holiday that is in:

- | | |
|-----------|-------------------------|
| November | <u>Thanksgiving Day</u> |
| May | <u>Memorial Day</u> |
| September | <u>Labor Day</u> |
| July | <u>Independence Day</u> |
| December | <u>Christmas Day</u> |

- | | | |
|-------------------------|---------------------------|------------------------------|
| 2 birthdays in February | <u>Lincoln's Birthday</u> | <u>Washington's Birthday</u> |
|-------------------------|---------------------------|------------------------------|

Lesson 24

Date _____ Parent's Initials

Bible

Write which type of sentence each of these verses is. Label with D for declarative, I for interrogative, and E for exclamatory. Place the correct punctuation mark at the end of the sentence.

1. O Lord, our Lord, how majestic is your name in all the earth. I E Psalm 8:1
mark type

2. My God, my God, why have you forsaken me. ? I Psalm 22:1
mark type

3. The Lord is my shepherd; I shall not be in want. . D Psalm 23:1
mark type

Math

1. Circle the dimes in each amount.

\$10 \$20 \$50 \$100

2. Round to the nearest dollar.

a. \$ 15.78 \$16.00 b. \$ 6.12 \$6.00
c. \$ 13.25 \$13.00 c. \$ 8.58 \$9.00

3. $\begin{array}{r} \$ 3.00 \\ - 1.75 \\ \hline \$ 1.25 \end{array}$ 4. $\begin{array}{r} \$ 2.00 \\ \quad .75 \\ \hline \$ 3.00 \end{array}$ 5. $\begin{array}{r} \$ 2.78 \\ \quad .39 \\ \hline \$ 2.39 \end{array}$

Lesson 25

Date _____ Parent's Initials

Bible

Romans 8:28 - A favorite verse of Edward in Pilgrim Boy and of Billy in All Things - Even Frisky. Try to write it from memory if you can. If not, look it up.

And we know that in all things God works for the good of those who love him. (or similar wording)

What situation that seems bad to you now, will you trust God to work for good?

Math

Solve the problems and label each part with the following terms.

sum factors addends quotient subtrahend
difference minuend dividend product divisor

1. $\begin{array}{r} 46 \\ + 19 \\ \hline 65 \end{array}$ addends sum
2. $\begin{array}{r} 31 \\ - 17 \\ \hline 14 \end{array}$ minuend subtrahend difference
3. $\begin{array}{r} 7 \\ \times 4 \\ \hline 28 \end{array}$ factors product divisor quotient dividend

Cornerstone Christian Academy
Second Grade
Summer/Time/Ticker

Lesson 24

Phonics/Language

A declarative sentence ends with a period.

An interrogative sentence ends with a question mark.

An exclamatory sentence ends with an exclamation mark.

Write a declarative, an interrogative, and an exclamatory sentence of your own.

1. _____
2. _____
3. _____

History & Science

An experiment to do:

Fill the sink 1/2 full of cold water. Turn a glass upside down and push it straight down into the water.


Is there any water in the glass?

Why is it hard to keep pushing down? air in glass

Is there something in the glass that you can't see?

How can you get water to go in the glass? tip glass

Draw a picture of your experiment.



Cornerstone Christian Academy
Second Grade
Summer/Time/Ticker

Lesson 25

Phonics/Language

Write the special sounds.

a in sleep
a in banana
o in show
ou in country

y in crystal


ow in howl
o in go

y in fly

History & Science

Number these events in the order they happened.

- 3 The Pilgrim men arrived in Holland first and later the judges in England sent the women and children to join them.
- 5 Both Strangers and Separatists set out from England to America.
- 1 The Separatists wanted freedom from the Church of England to worship as they pleased.
- 4 The Pilgrims were not happy in Holland because they wanted to be farmers and their children learned the Dutch ways.
- 2 A greedy captain took their money but did not take the Separatists to Holland.



Lesson 26

Date _____ Parent's Initials

Bible

Think of a special missionary you know. Find their country on a globe or map. Pray for them today - for health, financial needs, safety, and encouragement.

How, then, can they call on the one

they have not believed in? And how can they believe

in the one of whom they have not heard? And how can they

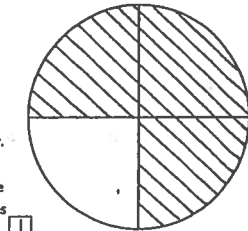
hear without someone preaching to them?

Romans 10:14

Math

1. Nearly 3/4 of the earth is water.

Color 3/4 blue. Color the rest green to show how much of the earth is land. What fraction tells how much of the earth is land?



2. $\begin{array}{r} \$ 20.00 \\ - 9.40 \\ \hline \$ 10.60 \end{array}$ 3. $\begin{array}{r} \$ 53.06 \\ - 17.77 \\ \hline \$ 35.29 \end{array}$ 4. $\begin{array}{r} \$ 1.28 \\ \quad .79 \\ \hline 3.62 \\ \quad 7.01 \\ \hline + .48 \\ \hline \$ 13.18 \end{array}$

Cornerstone Christian Academy
Second Grade
Summer/Time/Ticker

Lesson 26

Phonics/Language

Divide these words into syllables. Mark the vowels.

hhmher hhppy
ststable hhlly
clcliver ggogale
llpplage ttny
BBole sspsider
ststudent ppllpow

You can divide between 2 consonants that are alike. The first vowel is short. You can divide between a long vowel and consonant at the end of an accented syllable.


History & Science



There are 4 oceans on earth. They are the: 1 Pacific, 2 Atlantic, 3 Arctic, & 4 Indian


1. Circle the one that is the world's largest ocean.
2. Box the coldest and smallest ocean.
3. Underline the saltiest ocean with the best fishing areas.
4. X the ocean warmest and near the equator.

Lesson 27 Date _____ Parent's Initials

Bible 

... If my people, who are called by my name, will humble themselves and pray and seek my face and turn from their wicked ways, then I will hear from heaven and will forgive their sin and will heal their land.

2 Chronicles 7:14

Math 

1. Write >, <, or =.

a. in. \gt cm
b. yd. \lt m
c. qt. \gt pt.
d. g. \lt oz.

2. Write >, <, or =.


a. $4 \times 9 + 2 \gt 12 \times 2 + 4$
b. $16 + 2 - 5 \lt 3 + 3 + 3$
c. $8 + 6 + 2 = 35 + 5 \times 1$
d. $15 + 5 + 4 = 4 \times 3 - 7$

3. Count forward and backward by threes

3 6 9 12, 15 18
21 24 27 30


Cornerstone Christian Academy
Second Grade
Summer/TimeTicker

Lesson 27

Phonics/Language  Will vary.

Circle the correct answer. Give an example word for each rule.

- A suffix comes at the (beginning, end) of a word. taken
- Usually (ch, tch) comes after a short vowel. latch
- A double consonant makes the first vowel (long, short). puddle
- (c, k) goes before i and e. kite
- When c comes before e, i, or y it says (s, k). place


History & Science 

Finish the paragraph by writing 5 sentences telling what things you can do to be a good citizen of the United States.

A good citizen is important to his country. I can help my country by

praying
obeying laws
keeping America clean

Lesson 28 Date _____ Parent's Initials


Bible 

In John 10:1-18 Jesus talks about the sheep and the shepherd.

The good shepherd:

vs. 3 knows his sheep by name
vs. 11 lays down his life for the sheep
vs. 14 knows his sheep and they know him

Who is the good shepherd? Jesus
Who are the sheep? we are

Math 

1.
$$\begin{array}{r} 256 \\ 981 \\ 427 \\ 32 \\ + 64 \\ \hline 1,760 \end{array}$$

2.
$$\begin{array}{r} 849 \\ 375 \\ + 146 \\ \hline 1,370 \end{array}$$

3.
$$\begin{array}{r} 927 \\ 33 \\ 308 \\ 25 \\ + 476 \\ \hline 1,769 \end{array}$$


4.
$$\begin{array}{r} 2000 \\ - 796 \\ \hline 1204 \end{array}$$

5.
$$\begin{array}{r} 5,000 \\ - 2,388 \\ \hline 2,612 \end{array}$$

6.
$$\begin{array}{r} \$ 8,000 \\ - 4,640 \\ \hline \$ 3,360 \end{array}$$


Cornerstone Christian Academy
Second Grade
Summer/TimeTicker

Lesson 28

Phonics/Language  Will vary.


Circle the correct answer. Give an example word for each rule.

- Use (ck) after a short vowel. lack
- When g comes before an e, i, or y it says (g in giant, g in goat). ginger
- A prefix comes at the (beginning, end) of a word. around
- The vowel at the end of an accented syllable is usually (long, short). table Hint: See Lesson 26.
- Usually (g, dg) comes after a short vowel. lodge

History & Science 


Use your initials to design your own cattle brand. Write the name of your ranch under it.

Lesson 29 Date _____ Parent's Initials

Bible 

Read Exodus 14:21-25. Answer the questions.

- What was divided? the Red Sea
- Who divided it? the Lord
- For whom was it divided? the Israelites
- From whom were they fleeing? the Egyptians
- Who can you trust to come to your rescue when the enemy (Satan) is chasing after you? the Lord

Math 

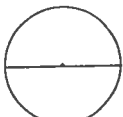
1.
$$\begin{array}{r} 7 \\ 2 \overline{) 14} \end{array}$$

2.
$$\begin{array}{r} 9 \\ 2 \overline{) 18} \end{array}$$

3.
$$\begin{array}{r} 12 \\ 2 \overline{) 24} \end{array}$$


4. $16 \div 2 = 8$
5. $40 \div 2 = 20$
6. $180 \div 2 = 90$
7. $240 \div 2 = 120$
8. $50 \div 2 = 25$
9. $120 \div 2 = 60$
10. $200 \div 2 = 100$
11. $140 \div 2 = 70$

12. Divide the circle in half. To divide a circle in half, you must go through the center.



Cornerstone Christian Academy
Second Grade
Summer/TimeTicker

Lesson 29


Phonics/Language  Will vary.

A compound word is two words put together to form one word. Write a compound word for each word given.

- sun sunshine
- ball baseball
- man postman
- butter butterfly
- thing something
- air airplane
- milk milkman
- cake cupcake

You can divide between 2 words in a compound word


Divide your compound words. You may have more than 2 syllables.

History & Science 

Draw a colonial schoolbook. It was called a hornbook.

Lesson 30

Date _____ Parent's Initials


Bible 


Read Matthew 13:1-9. Name the four places the seed fell and what happened to it.

4 places	What happened
1. <u>path</u>	<u>birds came and ate it up</u>
2. <u>rocky places</u>	<u>shallow soil, no roots</u>
3. <u>thorny places</u>	<u>choked the plants</u>
4. <u>good soil</u>	<u>produced a crop</u>

The seed is like God's Word and the four places stand for your heart. Is your soil good? _____

Do you hear God's Word and obey it? _____



Math 

- Write the value of each digit.
Example: $429 = 400 + 20 + 9$


$27 = 20 + 7$	$3. \quad 4,875$
$364 = 300 + 60 + 4$	$+ 2,608$
$709 = 700 + 9$	$7,483$
$3,468 = 3,000 + 400 + 60 + 8$	$4. \quad 6,901$
$12,526 = 10,000 + 2,000 + 500 + 20 + 6$	$- 4,187$
	$2,714$

- Circle Roman numerals greater than 50.

XLVII XCIV LXXXVIII XXXIX


Lesson 30

Cornerstone Christian Academy
Second Grade
Summer/Time/Ticker

Phonics/Language 

Write words that are opposites. *Can vary.*


- under over
- proud humble
- careful careless
- stingy generous
- wild tame
- common rare
- frown smile
- weak strong
- north south
- remember forget

History & Science 

Collect 6 seeds and tape in each box. Label them. They can be from the garden or from foods.

Lesson 31

Date _____ Parent's Initials


Bible 

Rejoice in the Lord always. I will say it again. Rejoice! Let your gentleness be evident to all. The Lord is near. Philippians 4:4-5

Do you remember gentleness from Galatians 5:22-23? Gentleness is one of the fruits of the Spirit.

I will show gentleness to a friend today by _____

I will show gentleness to an animal today by _____

Math 

- Write the missing addends.

$\begin{array}{r} 6 \\ + 9 \\ \hline 15 \end{array}$	$\begin{array}{r} 7 \\ + 4 \\ \hline 11 \end{array}$	$\begin{array}{r} 8 \\ + 8 \\ \hline 16 \end{array}$	$\begin{array}{r} 3 \\ + 9 \\ \hline 12 \end{array}$	$\begin{array}{r} 8 \\ + 5 \\ \hline 13 \end{array}$	$\begin{array}{r} 6 \\ + 7 \\ \hline 13 \end{array}$
--	--	--	--	--	--


- Write the missing factors.

$\begin{array}{r} 2 \\ \times 4 \\ \hline 8 \end{array}$	$\begin{array}{r} 4 \\ \times 6 \\ \hline 24 \end{array}$	$\begin{array}{r} 3 \\ \times 5 \\ \hline 15 \end{array}$	$\begin{array}{r} 3 \\ \times 8 \\ \hline 24 \end{array}$	$\begin{array}{r} 7 \\ \times 3 \\ \hline 21 \end{array}$	$\begin{array}{r} 12 \\ \times 5 \\ \hline 60 \end{array}$
--	---	---	---	---	--

- Grace, Molly, and Alissa each read 4 books for the summer reading program. How many books did the girls read altogether. Solve 2 ways. Use addition and multiplication. $3 \times 4 = 12$ $4 + 4 + 4 = 12$


Lesson 31

Cornerstone Christian Academy
Second Grade
Summer/Time/Ticker

Phonics/Language 


Write words that mean the same.

- autumn fall
- courageous brave
- liberty freedom
- arduous worried
- author writer
- begin start
- timid shy
- perish die
- wicked evil
- ill sick

History & Science 

Write the titles of four patriotic songs you have sung and learned about. Remember, most important words in a title begin with a capital letter.


-
-
-
-



Color the drum red, white, and blue.


Lesson 32

Date _____ Parent's Initials

Bible 

Do everything without complaining or arguing so that you may become blameless and pure, children of God without fault in a crooked and depraved generation, in which you shine like stars in the universe. Philippians 2:14-15

Do you do everything without grumbling and complaining? Try it today. Then you will shine brightly like: (draw something)

Math 

- Round to the nearest dollar.


\$ 3.41	\$ 5.99	\$ 26.09	\$ 9.50
<u>\$ 3.00</u>	<u>\$ 6.00</u>	<u>\$ 26.00</u>	<u>\$ 10.00</u>

- Write the tens the number is between. Circle the number it rounds to.

53 is between <u>50</u> and <u>60</u>	924
86 is between <u>80</u> and <u>90</u>	730
14 is between <u>10</u> and <u>20</u>	<u>1,295</u>
67 is between <u>60</u> and <u>70</u>	16
	138

Lesson 32

Cornerstone Christian Academy
Second Grade
Summer/Time/Ticker

Phonics/Language 


Write a homophone for each. Remember, homophones sound alike but have different meanings. Use your word in a sentence.


tall tole

ate eight

blue blew

hi high

History & Science 

Something to try: 

Find a dark, dirty penny. Try scrubbing it with soap and water. What happens?

Now try putting the penny in a cup. Cover the penny with lemon juice. Leave it for 5 minutes.

Check the penny. How does it look now? _____

What cleaned the penny? _____

Why? _____

You can ask a parent about this. You can try this with vinegar, also.

Lesson 33

Date _____ Parent's Initials _____

Bible

Do you remember who the Philippans were? They were the people who lived in Philippi (Phil. 1:1).
 We had a story about one special Philippian. You can find it in Acts 16:16-34.
 This Philippian man was a jailer.
 The two missionaries who told him about Jesus were Paul and Silas.
 When did this all take place? It happened about midnight.
 What kindnesses did the Philippian show the missionaries who told him how to be saved? He took them to his house, washed their wounds, and gave them a meal.

Math

1. Make change. You are paying with \$10.00.

Amount	1¢	5¢	10¢	25¢	\$1.00	\$5.00
\$ 3.18	2	1	0	3	1	1
\$ 4.63	2	0	1	1	0	1
\$ 8.81	4	1	1	0	1	0

2. Using Roman numerals, count from 30-40.
 XXX, XXXI, XXXII, XXXIII, XXXIV, XXXV, XXXVI, XXXVII, XXXVIII, XXXIX, XL



Cornerstone Christian Academy
 Second Grade
 Summer/TIMEteller

Lesson 33


Phonics/Language

These clues are from books we have read. Write the title. Remember, all important words in titles begin with a capital letter.

"the silver shoes" Wizard of Oz
 "some pig" Charlotte's Web
 "I am a Thing-finder." Pippi Longstocking
 "Pa took down his fiddle and began to play and sing." Little House in the Big Woods
 "432 Proudfoot Avenue" Mr. Popper's Penguins
 "a genuine cowhide football stitched with nylon thread and laced with buckskin thongs" Henry Huggins

Color a favorite butterfly or moth.

History & Science



Lesson 34

Date _____ Parent's Initials _____

Bible

Who and I? Write the names of these Bible women.

Ruth I chose to leave my home and family to stay with my mother-in-law.
Mart ha I was sure the tomb would stink when they rolled back the stone.
Est her If I perish, I perish.
Na omi I lost my husband and 2 sons in Moab.
Sora h I said I was his sister, when really I was his wife.
Hanna h I prayed for a son, and God gave me one.
Mary If the Lord had been there, my brother would not have died.

Math

- Count by threes.
3 6 9 12 15 18 21 24 27
- Count by tens.
33 43 53 63 73 83 93 103 113
- Count by fours.
4 8 12 16 20 24 28 32 36
- Count by fives.
30 35 40 45 50 55 60 65 70
- Count by twos.
100 102 104 106 108 110 112 114 116

Cornerstone Christian Academy
 Second Grade
 Summer/TIMEteller

Lesson 34

Phonics/Language

Write 5 sentences describing how to build a sand castle. Remember to indent to start your paragraph.



History & Science

Go outside and find several different leaves. Put them under a thin piece of paper and rub over them with a pencil. Do the veins show up? _____
 The veins in our body carry blood. The veins in a leaf carry water.
chlorophyll colors the leaves green. Its main job is to help the plant make food. The food it makes is sugar.

Lesson 35

Date _____ Parent's Initials _____

Bible

A favorite verse - John 3:16. Can you write it from memory?

For God so loved the world that he gave his one and only Son, that whoever believes in him shall not perish but have eternal life.

Check your Bible to see how you did. How much does God love you? _____

He gave his only Son to save me.

Math

- A snowflake has 6 points.
- An insect has 6 legs.
- A half dozen has 6 items.
- Circle the ones that equal six.

IV (4+2) (99-93) (7) 4×2 (4-8)

- | |
|------|
| 666 |
| + 66 |
| 732 |

6. 6,606
- 660
5,946

7. 6,006
- 666
5,340

8. 66
+ 66
198



Cornerstone Christian Academy
 Second Grade
 Summer/TIMEteller

Lesson 35

Phonics/Language

Rewrite the sentences using contractions when possible.

1. He will go camping in Wisconsin.

He'll

2. He thinks it is hard to pack.

it's

3. He will be sorry if he does not bring sunscreen.

He'll doesn't

History & Science

Draw a picture of something you play with that uses.....

push for movement.

pull for movement.

gravity for movement.

Lesson 36

Date _____ Parent's Initials

Bible

Who am I?

A A R A H A M I left Ur with my wife to go to the land of promise.
 I was chained between 2 guards when an angel came and rescued me.

P P E T E R
 I lived with priest Eli at a young age.

S I L A S
 Paul and I sang hymns in prison.

M O S E S
 I'm not a good speaker but I went to Pharaoh.

D A V I D
 I killed the Philistine with a sling and a stone.

J O S E P H
 I was the earthly father of Jesus.

D A N I E L
 I refused to eat the king's food in Babylon.

These men B E L I E V E D God.

Math

$1 \times 2 \times 3 \times 4 = 24$	$3 \times 3 \times 3 = 27$
$5 \times 4 \times 1 = 20$	$5 \times 4 \times 3 \times 2 = 120$
$3 \times 3 \times 2 = 18$	$6 \times 5 \times 2 \times 3 = 180$
$2 \times 4 \times 5 = 40$	$3 \times 5 \times 2 \times 4 = 120$
$4 \times 3 \times 2 \times 2 = 48$	$4 \times 2 \times 5 \times 6 \times 7 \times 8 \times 0 = 0$

* Hint : Drop the 0 and then put back in the final answer

Lesson 37

Date _____ Parent's Initials

Bible

What will you wear today?
 Put on the full armor of God so that you
can take your
stand against the devil's schemes.

Ephesians 6:11
 Parts of the armor:
 vs. 14 the belt of truth
 vs. 14 the breastplate of righteousness
 vs. 15 feet shod with the readiness that
 comes from the gospel of peace
 vs. 16 the shield of faith
 vs. 17 the helmet of salvation and the
sword of the Spirit
 vs. 18 and pray in the Spirit

Math

1. John had a hole in his pocket. He lost a nickel each block he walked to Grandma's house. He walked six blocks. How much did he lose? 30¢
 Why? $5 \times 6 = 30$

2. Sally came later to Grandma's house. She found all the nickels and put them with her own quarter and dime in her pocket. How much is in her pocket? 65¢
 Why? $30 + 25 + 10 = 65$

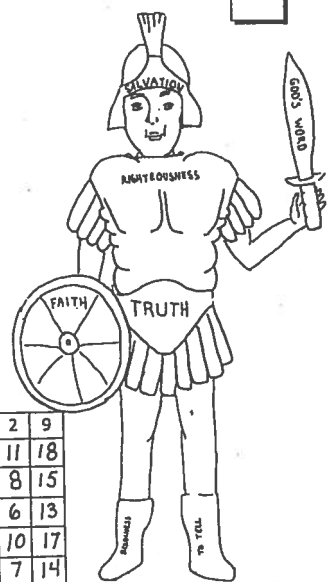
3. Sally returned John's nickels. Grandma laughed when she heard the story. She sewed John's hole and gave each of the children \$1.00. How much does Sally have now? \$ 1.35
 Why? $1.00 + .25 + .10 = 1.35$

Lesson 38

Date _____ Parent's Initials

Bible

Color my armor.



Math

Solve.

+	7	3	6	2	9
9	16	12	15	11	18
6	13	9	12	8	15
4	11	7	10	6	13
8	15	11	14	10	17
5	12	8	11	7	14

Lesson 36

Phonics/Language

Match contractions to the two words.

1. he'd	<u>e</u>	a. could have
2. I'll	<u>b</u>	b. I will
3. can't	<u>h</u>	c. you are
4. he's	<u>d</u>	d. he is
5. could've	<u>a</u>	e. he had
6. won't	<u>i</u>	f. they are
7. they're	<u>f</u>	g. did not
8. I'm	<u>j</u>	h. can not
9. you're	<u>c</u>	i. will not
10. didn't	<u>g</u>	j. I am

History & Science

Draw a picture of something you play with that uses.....
 water for movement.
 air for movement.
 friction to slow movement.

Lesson 37

Phonics/Language

Write 1 for ea in leaf
 2 for ea in thread
 3 for ea in steak
 0 for none of the above

<u>2</u> breath	<u>3</u> greatly	<u>2</u> pleasant
<u>1</u> teacher	<u>1</u> leaves	<u>2</u> weather
<u>2</u> ocean	<u>3</u> ya	<u>2</u> feather
<u>0</u> creation	<u>2</u> breakfast	<u>3</u> break
<u>1</u> pleased	<u>0</u> tearing	<u>2</u> spread

History & Science

Can you pass through a piece of paper?
 Instructions
 1. Fold a piece of paper in half.
 2. Cut like shown an odd number of times
 3. Cut the folds except the first and the last.
 4. Open up carefully and walk through!

Lesson 38

Phonics/Language

Write the 5 prefixes from memory. In the box, write as many words as you can that use that prefix.

1.	<u>a-</u> in <u>asleep</u> around ago alike	Will vary.
2.	<u>al-</u> in <u>also</u> always already almost	
3.	<u>be-</u> in <u>because</u> beside below belong	
4.	<u>en-</u> in <u>enjoy</u> encamp encircle enable	
5.	<u>un-</u> in <u>unbutton</u> unpack unwind unripe	

History & Science

1. Which ocean is between the United States and England?
Atlantic

2. Which country is north of the United States, yet a part of North America?
Canada

3. Which country is south of the United States, yet a part of North America?
Mexico

4. Our nation's capital is Washington D.C.



Lesson 39

Date _____ Parent's Initials

Bible

Some shadow verses to find.

- hide me in the shadow of your wings..... Psalm 17:8b
- He who dwells in the shelter of the Most High will rest in the shadow of the Almighty. Psalm 91:1
- in the shadow of his hand he hid me.... Isaiah 49:2

Math

- What is 1/4 of.....

$$\begin{array}{r} 20 \quad 5 \quad 8 \quad 2 \quad 36 \quad 9 \quad 16 \quad 4 \\ \quad \quad 8 \quad \quad \quad 3 \quad \quad \quad 6 \\ 4 \overline{)32} \quad 4 \overline{)12} \quad 4 \overline{)24} \end{array}$$

- What is 1/3 of.....

$$\begin{array}{r} 27 \quad 9 \quad 12 \quad 4 \quad 33 \quad 11 \quad 18 \quad 6 \\ \quad \quad 5 \quad \quad \quad 10 \quad \quad \quad 8 \\ 3 \overline{)15} \quad 3 \overline{)30} \quad 3 \overline{)24} \end{array}$$

- Circle which is greater? 1/4 or (1/3)

Cornerstone Christian Academy
Second Grade
Summer Time Ticker

Lesson 39

Phonics/Language

What book have you read most recently?


Title _____
Characters _____
Where did it take place? _____
When did it take place? _____
What happened? _____

History & Science

Watch the same shadow outside today. It can even be your shadow if you get someone to measure it for you. Measure its length at the times shown below.

Write the length in the chart.

Time	Length
10:00	
12:00	
2:00	
4:00	



When was the shadow longest? early or late in day
Why? the sun is low

When was the shadow shortest? noon
Why? the sun is highest

Lesson 40

Date _____ Parent's Initials

Bible

Sing the song to fill in the Books of the New Testament.

Matthew, Mark, Luke, John, Acts
Romans, 1 and 2 Corinthians, Galatians
Ephesians, Philippians, Colossians, 1 and 2 Thessalonians, 1 and 2
Timothy, Titus, Philemon, Hebrews
James, 1 and 2 Peter, 1, 2, 3 John
Jude and Revelation

Math

- There are 39 Books of the Old Testament. There are 27 Books of the New Testament. How many Books are in the complete Bible?
66 Why? 39 + 27 = 66

- Solve.

$$\begin{array}{r} 9 \quad 17 \quad 23 \quad 15 \quad 8 \\ \times 5 \quad - 8 \quad + 78 \quad + 6 \quad \times 4 \\ \hline 45 \quad 9 \quad 101 \quad 21 \quad 32 \\ \hline 11 \quad 3 \quad 18 \quad 6 \quad 16 \\ - 7 \quad + 9 \quad + 18 \quad \times 5 \quad - 5 \\ \hline 4 \quad 12 \quad 36 \quad 30 \quad 11 \end{array}$$



Cornerstone Christian Academy
Second Grade
Summer Time Ticker

Lesson 40

Phonics/Language

Mark 1 for ow in bowl
2 for ow in owl

- | | | |
|-----------------|-----------------|-------------------|
| <u>1</u> sorrow | <u>1</u> tow | <u>2</u> growl |
| <u>2</u> wow | <u>1</u> stow | <u>1</u> tomorrow |
| <u>2</u> vowel | <u>2</u> now | <u>1</u> slow |
| <u>2</u> cow | <u>1</u> crow | <u>1</u> show |
| <u>2</u> towel | <u>2</u> flower | <u>1</u> row |

History & Science



Do you see an American flag? Say the Pledge of Allegiance.

I pledge allegiance to the flag of the United States of America and to the Republic for which it stands, one nation under God, indivisible with liberty and justice for all.

You put on the stars and stripes.

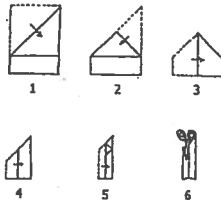
Lesson 41

Date _____ Parent's Initials

Bible

Instructions for folded cross:

- Fold corner over to edge to make point.
- Fold point down so paper looks like a simple house.
- Fold in half.
- Fold in half again.
- Open.
- Cut along this last fold.



Math

- Make a calendar for August. How many days in August? 31
If July ends on a Tuesday, then on what day will August begin? Wed.
Mark the first day of school in red. Mark the school picnic in green.

August						
Sun.	Mon.	Tues.	Wed.	Thurs.	Fri.	Sat.
			1			

Cornerstone Christian Academy
Second Grade
Summer Time Ticker

Lesson 41

Phonics/Language

Unscramble these sentences and write. Place the correct punctuation mark at the end.

- ever you stand Have lemonade had a
Have you ever had a lemonade stand?
- will it business day If good hot a is you get
If it is a hot day you will get good business.
- and sugar combine water with You juice lemon
You combine water with sugar and lemon juice.
- showing a Make the large price sign
Make a large sign showing the price.
- Don't cups the ice forget and
Don't forget the cups and ice!

History & Science

Try this! Do you remember what evaporation is? Evaporation is when water disappears into the air. It happens when you hang clothes out to dry. You can catch some water as it tries to evaporate. Cover the bottom of a small bowl with water. Place it in a sunny spot outdoors. Cover the top of the bowl with plastic wrap. Check back in an hour. What do you see? _____

Uncover the bowl and see how long it will take for the water to completely disappear.

Lesson 42

Date _____ Parent's Initials

Bible

Match the Bible character to the Bible book.

Moses	2 Samuel
David	Genesis
Shadrach, Meshach, Abednego	Ruth
Barnabas	Luke
Abraham	Esther
Jesus' birth	Acts
Boaz	Exodus
Mordecai	Daniel

Math

1. Give the estimated sum.

$\begin{array}{r} 65 \\ + 21 \\ \hline 90 \end{array}$	$\begin{array}{r} 37 \\ + 73 \\ \hline 110 \end{array}$	$\begin{array}{r} 11 \\ + 49 \\ \hline 60 \end{array}$
--	---	--

2. Which are rounded to the nearest dollar? Circle them.

\$4.01 \$7.90 \$3.00 \$5.00 \$8.30

3. Round to the nearest ten.

29 30 16 20 88 90 63 60 41 40 35 40

Cornerstone Christian Academy
Second Grade
Summer/Time/Ticker

Lesson 42



Phonics/Language

Write the words in the correct column.

loose, maroon, wooden, scooter, bloody, teaspoon, bookmark, moose, goofy, goodness, stood, floods, roomy, zoo, crooked, noon, foot

<u>go in book</u>	<u>go in tooth</u>	<u>go in food</u>
wooden	loose	Zoo
bookmark	maroon	noon
goodness	scooter	bloody
stood	teaspoon	floods
crooked	moose	
foot	goofy	
	roomy	

History & Science

Match the famous date to its event.

July 4, 1776	Abraham Lincoln's birthday
Feb. 12	Pilgrims landed in New World
Nov. 11, 1620	America won independence from England
Feb. 22	George Washington's birthday
June 14	Memorial Day
May 30	Flag Day

Lesson 43

Date _____ Parent's Initials

Bible

Read Matthew 14: 13-21

The number of those who ate was about five thousand men, besides women and children. Matthew 14:21

What did they eat? They ate bread and fish.

Where did it come from? 5 loaves and two fish

What was left? 12 basketfuls of leftovers

Math

1. Write the value of the underlined digit.

4 <u>3</u> 7	<u>3</u> 0	79,8 <u>6</u> 2	3
13,9 <u>7</u> 0	<u>10,000</u>	9 <u>5</u> ,348	<u>5,000</u>
6,4 <u>6</u> 1	<u>60</u>	20 <u>5</u>	<u>700</u>

2. Measure the lines shown.

_____ 2 1/4 in.
 _____ 6 cm
 _____ 4 3/4 in.
 _____ 12 1/2 cm

Cornerstone Christian Academy
Second Grade
Summer/Time/Ticker

Lesson 43




Phonics/Language

Circle o in shovel and a in banana.

compare	o g ne	wisdo n
thous n d	pack o ge	o g zen
W o nday	disc o ver	sever o t
dist i nt	alph o bet	h o ney
br i ther	sh i ll o	w i nder
sen i tor	m o ther	g o vernor

History & Science

Draw a picture of the animal the pioneers had never seen before they moved west. He is over 10 feet long and weighs a thousand pounds. He would provide enough fresh meat for the whole wagon train.



What is it? buffalo (Circle the special sounds)

Lesson 44

Date _____ Parent's Initials

Bible

Read Mark 4:26-29.

Mark 4:28
 All by itself the soil produces grain - first the stalk, then the head, then the full kernel in the head.

When you share the Good News with someone, you are planting the seed. Who causes that seed to grow? God

Math

	$\begin{array}{r} 6 \\ + 8 \\ \hline 14 \end{array}$
	$\begin{array}{r} 8 \\ + 6 \\ \hline 14 \end{array}$
	$\begin{array}{r} 14 \\ - 6 \\ \hline 8 \end{array}$
	$\begin{array}{r} 14 \\ - 8 \\ \hline 6 \end{array}$

4 + 1 = 4
 8 + 1 = 8
 12 + 1 = 12

Cornerstone Christian Academy
Second Grade
Summer/Time/Ticker

Lesson 44



Phonics/Language

Circle special sounds in these corny words.

ea o s	co r n o ll o	fi r m e t
ro o s	fi r d	o r en
bu t te y	o r o l l o	ke n els
pl a nt e d	fe r tili z e r	roa s t e d
co r n o l l o	he l ves t	fl a kes
co r n o l l o	o r est	ye l l o



History & Science


The Pilgrims had never seen corn before. The Indians called corn maize. The Indians taught the Pilgrims a special way to plant corn. What was it? They put fish in the hole with the seed.

Draw some of the treats the Indians showed the Pilgrims how to fix using corn.

popcorn		roasted on the cob	
cornbread			


Have you enjoyed fresh sweet corn yet? _____

Lesson 45 Date _____ Parent's Initials


Bible 

Write Psalm 100:1.
Shout for joy to the Lord, all the earth.

Memorize it. Practice it several times today.


Math 

1 gal. =	4	qt.
1 yr. =	365	da.
1 ft. =	12	in.
1 m. =	100	cm.
1 hr. =	60	min.
1 yr. =	12	mo.
1 lb. =	16	oz.
1 pt. =	2	c.
1 yd. =	3	ft.
1 kg =	1,000	g



Cornerstone Christian Academy
Second Grade
Summer/TIME/Ticker


Lesson 45

Phonics/Language 

Write the words where they belong.

chatted, snored, traded, clipped, visited, roped, saved, mopped, begged, promised, checked, hurried, glided, nodded, ripped


-ed	-ed	-ed
wanted	played	looked
chatted	snored	clipped
traded	saved	roped
visited	begged	mopped
glided	hurried	promised
nodded		checked
		ripped

History & Science 

Match the words to the song.


"for purple mountain majesties" — "The Star-Spangled Banner"
 "the land of the free and the home of the brave" — "America"
 "Father and I went down to camp," — "America the Beautiful"
 "land of the Pilgrim's pride" — "Yankee Doodle"

Lesson 46 Date _____ Parent's Initials

Bible 

Write Psalm 100:2.
Worship the Lord with gladness; come before him with joyful songs.

Memorize it. Practice it several times today. Put Psalm 100: 1 and 2 together.


Math 

Take a one minute time test.


13	8	15	11	6	7
-7	+8	-9	-7	+7	+7
6	16	6	4	13	14
12	18	2	8	13	8
-7	-8	+14	+9	-4	+5
5	10	16	17	9	13
16	5	9	13	6	11
-7	+4	+5	-9	+9	-9
9	9	14	4	15	2
8	9	15	9	5	14
+4	+7	-8	+9	+6	-7
12	16	7	18	11	7

Cornerstone Christian Academy
Second Grade
Summer/TIME/Ticker

Lesson 46


Phonics/Language 

What is your favorite subject in school? _____
 Why? Write five sentences.

History & Science 


What was the name of the ship the Pilgrims used to come to the New World?
Mayflower. Draw it.

Lesson 47 Date _____ Parent's Initials

Bible 

Write Psalm 100:3.
Know that the Lord is God. It is he who made us, and we are his; we are his people, the sheep of his pasture.

Memorize it. Practice it several times today. Put Psalm 100: 1, 2, and 3 together.


Math 

Write the two times table.

0 x 2 = 0	7 x 2 = 14
1 x 2 = 2	8 x 2 = 16
2 x 2 = 4	9 x 2 = 18
3 x 2 = 6	10 x 2 = 20
4 x 2 = 8	11 x 2 = 22
5 x 2 = 10	12 x 2 = 24
6 x 2 = 12	


Cornerstone Christian Academy
Second Grade
Summer/TIME/Ticker

Lesson 47

Phonics/Language 

Be the teacher.
 Which words are spelled incorrectly. Circle and correct them.

obay	obey	shcool	school
mountain	mountain	sailor	_____
giggel	giggle	country	_____
injoy	enjoy	knot	gnat
fone	phone	dollar	_____


History & Science 

List items you would see in a colonial schoolroom.

fireplace
benches
wood floor
grades mixed
quill and ink
boy students
hornbook


Draw a colonial schoolroom.

Lesson 48 Date _____ Parent's Initials

Bible 

Write Psalm 100:4.
Enter his gates with thanksgiving
and his courts with praise; give
thanks to him and praise his name.

Memorize it. Practice it several times today. Put Psalm 100: 1, 2, 3, and 4 together.


Math 

Write the three times table.

0 x 3 = 0	7 x 3 = 21
1 x 3 = 3	8 x 3 = 24
2 x 3 = 6	9 x 3 = 27
3 x 3 = 9	10 x 3 = 30
4 x 3 = 12	11 x 3 = 33
5 x 3 = 15	12 x 3 = 36
6 x 3 = 18	

Cornerstone Christian Academy
Second Grade
Summer/Time/Ticker


Lesson 48


Phonics/Language 

Number the school supplies in ABC order.

9 ruler
6 paper
4 markers
8 pencils
3 eraser
2 crayons
5 notebook
1 crate
7 pen


What is the phrase in a picture? Write it!




History & Science 

Which president was he? Write the number.

19 Rutherford B. Hayes
27 William H. Taft
29 Warren G. Harding
23 Benjamin Harrison
20 James A. Garfield
25 William McKinley
18 Ulysses S. Grant




Lesson 49 Date _____ Parent's Initials

Bible 

Write Psalm 100:5.
For the Lord is good and his
love endures forever; his
faithfulness continues through
all generations.

Memorize it. Practice it several times today. Put Psalm 100: 1, 2, 3, 4, and 5 together.


Math 

Write the four times table.

0 x 4 = 0	7 x 4 = 28
1 x 4 = 4	8 x 4 = 32
2 x 4 = 8	9 x 4 = 36
3 x 4 = 12	10 x 4 = 40
4 x 4 = 16	11 x 4 = 44
5 x 4 = 20	12 x 4 = 48
6 x 4 = 24	


Cornerstone Christian Academy
Second Grade
Summer/Time/Ticker


Lesson 49

Phonics/Language 

Make new words.

read + ing reading
study + ed studied
early + est earliest
write + ing writing
learn + er learner
clap + ing clapping




History & Science 

Draw and label the states you have traveled in this summer.


Write the names of the states you have traveled in in your life.

Lesson 50 Date _____ Parent's Initials

Bible 

Pay attention and listen to the
sayings of the wise; apply your
heart to what I teach. Proverbs 22:17

Are you ready to go to school? _____
A good student is a good listener. Ask God to help you pay attention and listen in 3rd grade.


Math 

Write the five times table.

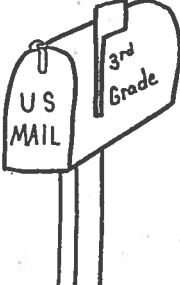
0 x 5 = 0	7 x 5 = 35
1 x 5 = 5	8 x 5 = 40
2 x 5 = 10	9 x 5 = 45
3 x 5 = 15	10 x 5 = 50
4 x 5 = 20	11 x 5 = 55
5 x 5 = 25	12 x 5 = 60
6 x 5 = 30	

Cornerstone Christian Academy
Second Grade
Summer/Time/Ticker


Lesson 50

Phonics/Language 

Write your new teacher a note, letting her know you are glad to be in her class.
Take it to her on your first day of school.



Color your mailbox.

History & Science 

Have a parent cut an apple in two. Put lemon juice on one half, on the white part of the apple. Leave the other half alone. Allow it to sit in the air. Check for several hours. Which one would be better to bring to your teacher? Why?

